

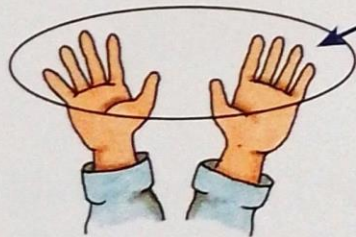
Üben 6

Ordne den Bildern die Zahlwörter aus dem Kasten zu.

seven ~~two~~ six eight three ten five nine four one



two



Numbers – Zahlen

Gegenstände zählen




Numbers – Zahlen
Gegenstände zählen

Lösung 6 Für jede richtige Zuordnung gibt es 1 Punkt.



two



nine




eight




three



six



seven



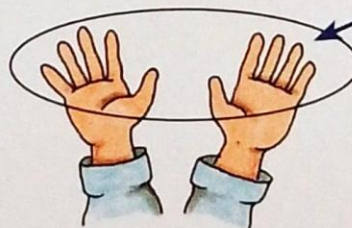
five



four



one



ten